


Today is Tuesday, January 5, 2021. It is DAY 4.		
Morning Message	<p>Good Morning Boys and Girls!  Welcome back! I hope you have had some fun times with your family the past few weeks. We are going to do things a bit differently today as we return to our Grade Two Classroom at Tiffany Hills virtually. Are you ready?  Mrs. Lewis</p>	
Question of the Day	<p>What special event took place on Monday, December 21st, 2020? (Hint: Think about our discussions of Stonehenge in England.)</p>	
Subject Area	Whole Group	Small Group
<b>LANGUAGE</b>		
Reading	<p>SQUIRT: 15 minutes (2X)</p> <p>Read a book of your own choice independently. Feel free to use Epic if you prefer.</p> <p>WORD WORK:</p> <p>Read and write down the 12 words that we are reviewing this week. You can do this in your agenda or in the provided exercise book.</p>	<p>Empower Group</p> <p>Daily 1:40 - 2:40</p> <p>*Mrs. Muschalla has provided a package of materials.</p>
Writing	<p><u>My Winter Break</u></p> <p>Think about some of the special activities you did the past few weeks (e.g., watched a movie with my family, made holiday cookies, etc.). Write about what you did and why they were special and fun.</p> <p>Here is a starter topic sentence for you to use if you wish:</p> <p><b>On the Winter Break, I had so much fun with my family!</b></p>	

	<p>Now, complete your writing assignment in the exercise book that is included in the 'Remote Learning' Package or you can download the template by clicking on the provided link. Don't forget to include an illustration.</p>	
<p>Oral</p>	<p>Let's Say Hello!</p>	
<p><b>MATH</b></p>		
<p>Math Talk</p>	<p><b><u>Addition Strategies Booklet</u></b></p> <p>Please note:</p> <p>We will be assembling our booklet that was sent home, tomorrow.</p> <p style="text-align: center;"><b><u>Strategy One</u></b></p> <p style="text-align: center;"><b>When you add zero to a number, there is no change in the value of the number.</b></p> <p style="text-align: center;"><b>E.g., <math>9 + 0 = 9</math></b></p> <p style="text-align: center;"><b>Watch this video by Jack Hartman:</b></p> <p style="text-align: center;"><b><u><a href="#">When You Add Zero to Any Number   Math Song ... - YouTube</a></u></b></p> <p style="text-align: center;"><b>Complete the provided worksheet, under today's blog posting, as indicated below.</b></p>	



Name: \_\_\_\_\_


**Adding 0's**

+ <span style="border: 1px solid black; display: inline-block; width: 20px; height: 20px; vertical-align: middle;"></span> =	$\frac{3}{+0}$ $\frac{3}{3}$
$3 + 0 = 3$	

$\begin{array}{r} 2 \\ +0 \\ \hline \end{array}$	$\begin{array}{r} 8 \\ +0 \\ \hline \end{array}$	$\begin{array}{r} 4 \\ +0 \\ \hline \end{array}$	$\begin{array}{r} 9 \\ +0 \\ \hline \end{array}$
$\begin{array}{r} 3 \\ +0 \\ \hline \end{array}$	$\begin{array}{r} 4 \\ +0 \\ \hline \end{array}$	$\begin{array}{r} 5 \\ +0 \\ \hline \end{array}$	$\begin{array}{r} 5 \\ +0 \\ \hline \end{array}$
$\begin{array}{r} 0 \\ +8 \\ \hline \end{array}$	$\begin{array}{r} 0 \\ +9 \\ \hline \end{array}$	$\begin{array}{r} 0 \\ +4 \\ \hline \end{array}$	$\begin{array}{r} 0 \\ +8 \\ \hline \end{array}$
$\begin{array}{r} 0 \\ +3 \\ \hline \end{array}$	$\begin{array}{r} 0 \\ +1 \\ \hline \end{array}$	$\begin{array}{r} 0 \\ +4 \\ \hline \end{array}$	$\begin{array}{r} 0 \\ +9 \\ \hline \end{array}$

1+0= .....	2+0= .....	3+0= .....	4+0= .....
5+0= .....	6+0= .....	7+0= .....	8+0= .....
9+0= .....	0+1= .....	0+5= .....	0+7= .....
0+3= .....	0+2= .....	0+8= .....	0+0= .....

✕   ✕   ✕   ✕



**Daily Math**


\*Use provided handout form Remote Package.

**WEEK 14**

**STRANDS:**  
Patterning and Algebra  
Number Sense

Complete the 4 questions for each of the strands.

During the remainder of the week, you can complete the Brain Stretch activities and 'Catching Snowflakes' activity when you choose.




**Math Journal**


Math Problem of the Day

If You Have Time

Solve the following word problem, using pictures, numbers, and words.



There were 25 Canadian geese resting on the pond on



	their way south. Some other geese decided to join them. Now there were 40 geese on the pond. How many geese joined the first 25 geese?	
<b>OTHER</b>		
<b>PHYSED</b>	Mrs. Price	
Catch-up/Free Time	Use this time to complete any unfinished work from today. As well, you may also explore Math Prodigy or Epic.	