




Name _____


Date _____

Add using the "counting on" strategy. (Hint: Keep the number on the monkey in your head, then count on using the number of bananas.)

 $5 + 3 =$

 $7 + 5 =$

 $11 + 4 =$

 $7 + 6 =$

 $15 + 2 =$

Graphics By...

