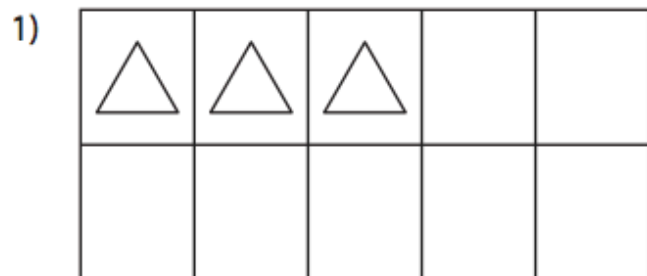


Name: _____

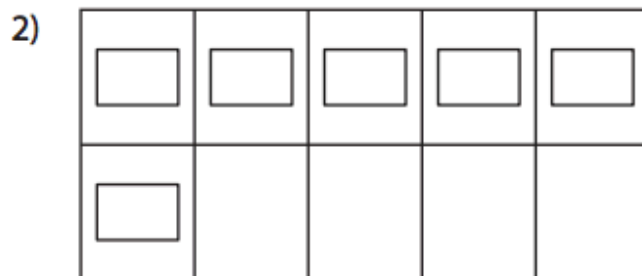
Making 10

Sheet 1

Draw more shapes to make 10 and complete the addition equation.



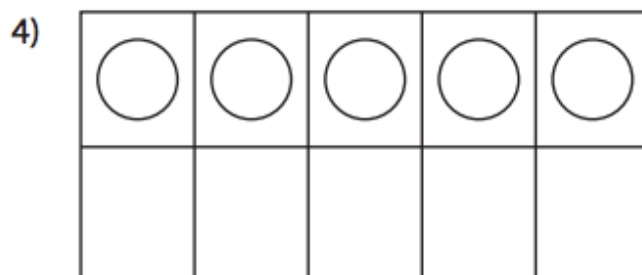
$$3 + \underline{\quad} = 10$$



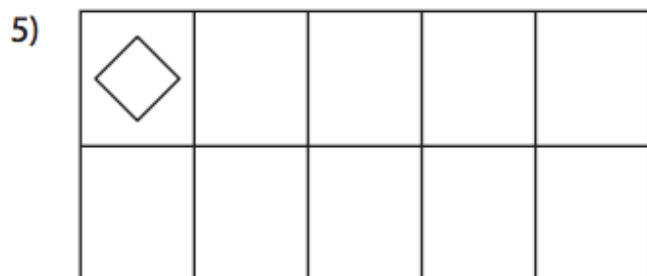
$$6 + \underline{\quad} = 10$$



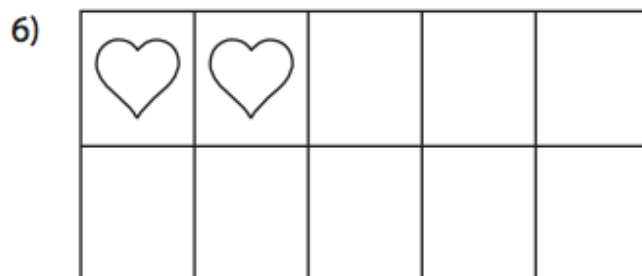
$$8 + \underline{\quad} = 10$$



$$5 + \underline{\quad} = 10$$



$$1 + \underline{\quad} = 10$$



$$2 + \underline{\quad} = 10$$